



Grade 1 Mathematics

Student At-Home Activity Packet

This At-Home Activity Packet includes 16 sets of practice problems that align to important math concepts your student has worked with so far this year.

We recommend that your student completes one page of practice problems each day.

Encourage your student to do the best they can with this content—the most important thing is that they continue developing their mathematical fluency and skills.

See the Grade 1 Math
concepts covered in
this packet!



Grade 1 Math concepts covered in this packet

Concept	Practice	Fluency and Skills Practice
Using Strategies to Add	1	Counting On to Add 3
	2	Using Doubles and Near Doubles 5
	3	Adding in Any Order with Near Doubles 7
	4	Making a Ten to Add 9
Using Strategies to Subtract	5	Understanding of Missing Addends 11
	6	Counting On to Subtract 12
	7	Making a Ten to Subtract 14
Understanding Addition and Subtraction	8	Number Partners for 10 16
	9	Adding and Subtracting in Word Problems 18
	10	Subtracting to Compare in Word Problems 20
	11	Understanding of True and False Equations 22
Understanding Place Value	12	Understanding of Teen Numbers 23
Adding and Subtracting within 20	13	Finding Totals Greater Than 10 25
	14	Adding Three Numbers 26
	15	Finding the Unknown Number 28
	16	Solving Word Problems to 20 30

Count on to add.**Example**

5



6

7

5

+

2

=

7

1

7



7

+

1

=

2

8



_____, _____

8

+

2

=

3

7



_____, _____

$$7 + 2 = \underline{\quad}$$

4

6



_____, _____, _____

$$6 + 3 = \underline{\quad}$$

Discuss It

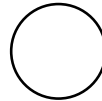
Did you always start at 1 when you counted? Explain.

Use what you know about doubles to solve.**Example**

1 black sticker. 1 white sticker.

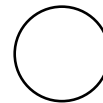
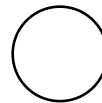
How many stickers in all?

$1 + 1 = \underline{2}$

 $\underline{2}$ stickers**1** 1 black sticker. 2 white stickers.

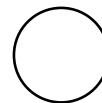
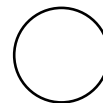
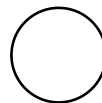
How many stickers in all?

$1 + 2 = \underline{\quad}$

 $\underline{\quad}$ stickers**2** 3 white stickers. 3 black stickers.

How many stickers in all?

$3 + 3 = \underline{\quad}$

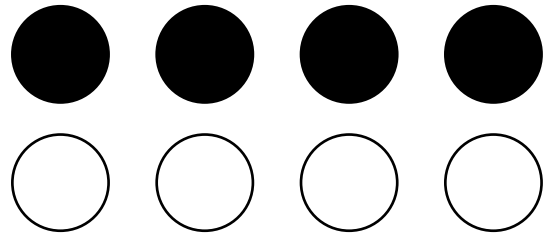
 $\underline{\quad}$ stickers

3 4 black stickers. 4 white stickers.

How many stickers in all?

$$4 + 4 = \underline{\quad}$$

 stickers




4 4 black squares.

5 white squares.

How many squares in all?

$$4 + 5 = \underline{\quad}$$

 squares



Discuss It

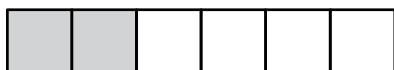
How is $3 + 3$ like $3 + 4$? How is it different?

Use the blocks. Complete the addition equations.


Example



$$4 + \underline{2} = 6$$



$$2 + \underline{4} = 6$$




$$5 + \underline{\quad} = 6$$



$$1 + \underline{\quad} = 6$$



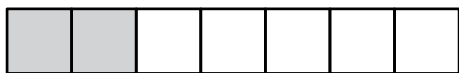
$$6 + \underline{\quad} = 6$$



$$0 + \underline{\quad} = 6$$



$$5 + \underline{\quad} = 7$$



$$2 + \underline{\quad} = 7$$




$$3 + \underline{\quad} = 7$$



$$4 + \underline{\quad} = 7$$

Adding in Any Order
with Near Doubles *continued*

Name _____




$1 + \underline{\quad} = 8$



$7 + \underline{\quad} = 8$



$6 + \underline{\quad} = 8$



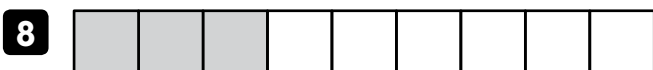
$2 + \underline{\quad} = 8$



$5 + \underline{\quad} = 9$



$4 + \underline{\quad} = 9$



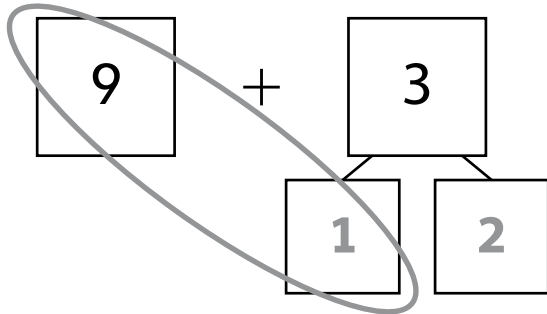
$3 + \underline{\quad} = 9$



$6 + \underline{\quad} = 9$

Fill in the number bonds to make a ten.

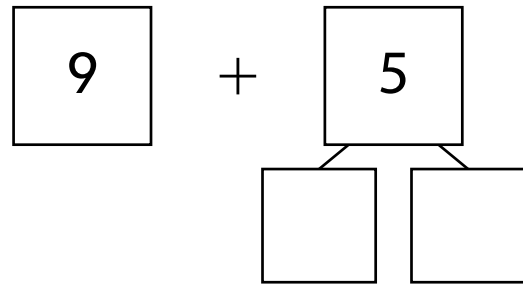
1 Find $9 + 3$.



$10 + 2 = \underline{\quad}$

$9 + 3 = \underline{\quad}$

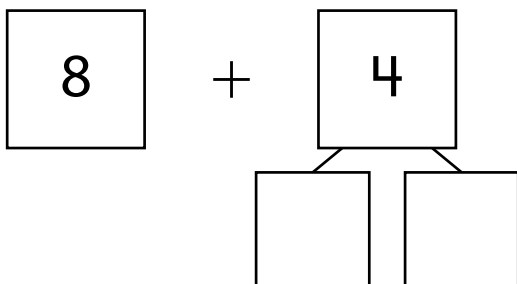
2 Find $9 + 5$.



$10 + 4 = \underline{\quad}$

$9 + 5 = \underline{\quad}$

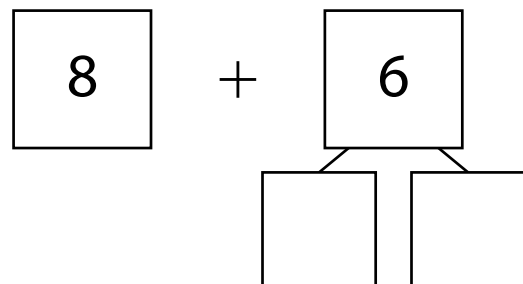
3 Find $8 + 4$.



$10 + 2 = \underline{\quad}$

$8 + 4 = \underline{\quad}$

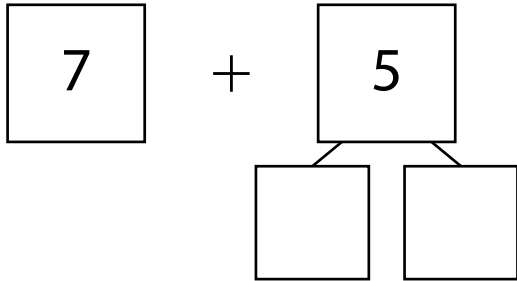
4 Find $8 + 6$.



$10 + 4 = \underline{\quad}$

$8 + 6 = \underline{\quad}$

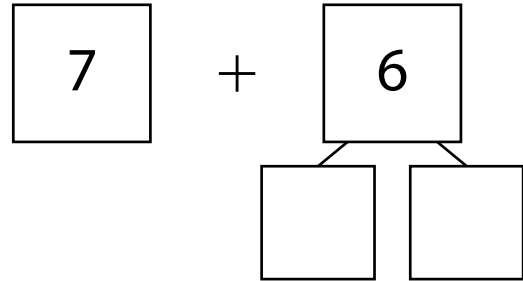
5 Find $7 + 5$.



$$10 + 2 = \underline{\quad}$$

$$7 + 5 = \underline{\quad}$$

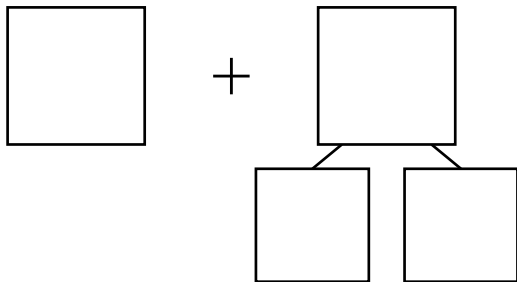
6 Find $7 + 6$.



$$10 + 3 = \underline{\quad}$$

$$7 + 6 = \underline{\quad}$$

7 Find $7 + 4$.



$$10 + 1 = \underline{\quad}$$

$$7 + 4 = \underline{\quad}$$

Discuss It

How does making a ten help you add two numbers?

Use addition to help you subtract.

1 Find $6 - 5$.

$$5 + \underline{1} = 6$$

$$6 - 5 = \underline{\quad}$$

2 Find $7 - 6$.

$$6 + \underline{\quad} = 7$$

$$7 - 6 = \underline{\quad}$$

3 Find $5 - 2$.

$$2 + \underline{\quad} = 5$$

$$5 - 2 = \underline{\quad}$$

4 Find $6 - 4$.

$$4 + \underline{\quad} = 6$$

$$6 - 4 = \underline{\quad}$$

5 Find $8 - 4$.

$$4 + \underline{\quad} = 8$$

$$8 - 4 = \underline{\quad}$$

6 Find $9 - 7$.

$$7 + \underline{\quad} = 9$$

$$9 - 7 = \underline{\quad}$$

7 Write an addition equation that helps you find $6 - 3$.
Then complete the subtraction equation.

$$\underline{\quad} + \underline{\quad} = \underline{\quad}$$

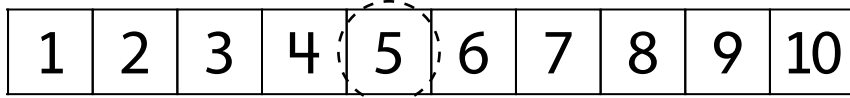
$$6 - 3 = \underline{\quad}$$

Discuss It

How can an addition equation help you solve a subtraction equation?

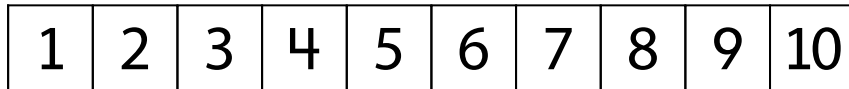
ExampleFind $5 - 3$.

Start at 3. Count on to 5.



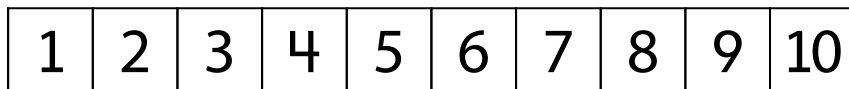
$3 + \underline{2} = 5$

$5 - 3 = \underline{2}$

1 Find $6 - 4$.

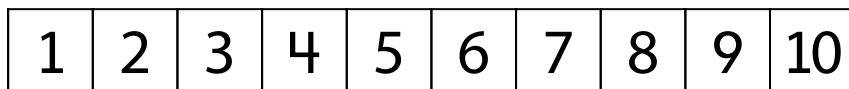
$4 + \underline{\quad} = 6$

$6 - 4 = \underline{\quad}$

2 Find $7 - 3$.

$3 + \underline{\quad} = 7$

$7 - 3 = \underline{\quad}$

3 Find $8 - 6$.

$6 + \underline{\quad} = 8$

$8 - 6 = \underline{\quad}$

4 Find $9 - 8$.

1	2	3	4	5	6	7	8	9	10
---	---	---	---	---	---	---	---	---	----

$8 + \underline{\quad} = 9$

$9 - 8 = \underline{\quad}$

5 Find $6 - 5$.

1	2	3	4	5	6	7	8	9	10
---	---	---	---	---	---	---	---	---	----

$5 + \underline{\quad} = 6$

$6 - 5 = \underline{\quad}$

6 Find $9 - 4$.

1	2	3	4	5	6	7	8	9	10
---	---	---	---	---	---	---	---	---	----

$4 + \underline{\quad} = 9$

$9 - 4 = \underline{\quad}$

7 Find $8 - 2$.

1	2	3	4	5	6	7	8	9	10
---	---	---	---	---	---	---	---	---	----

$2 + \underline{\quad} = 8$

$8 - 2 = \underline{\quad}$

Discuss It

How is solving $6 - 4$ the same as solving $9 - 4$?

How is it different?

Making a Ten to Subtract

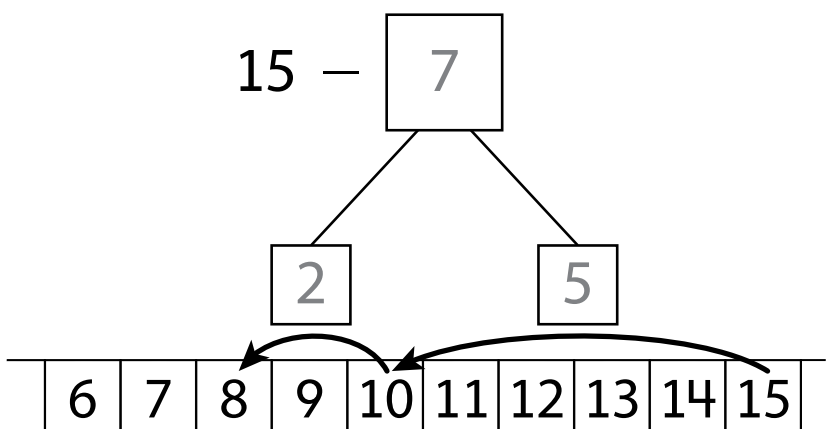
Name _____

1 Find $15 - 7$.

$$15 - \underline{5} = 10$$

$$10 - 2 = \underline{8}$$

$$15 - 7 = \underline{\quad}$$

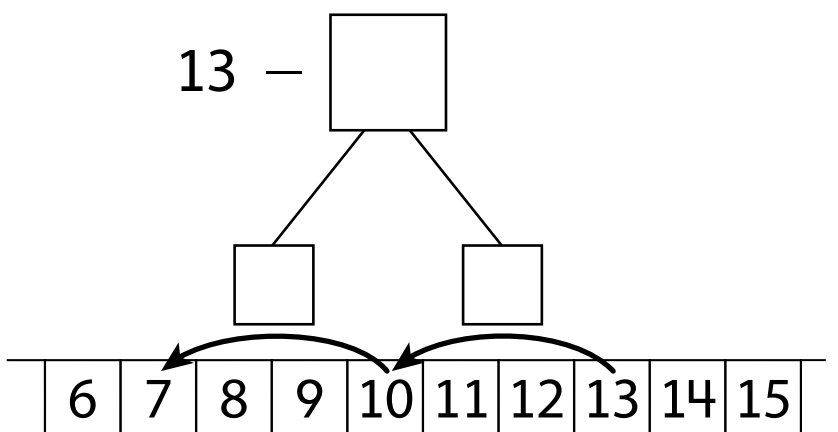


2 Find $13 - 6$.

$$13 - \underline{\quad} = 10$$

$$10 - 3 = \underline{\quad}$$

$$13 - 6 = \underline{\quad}$$

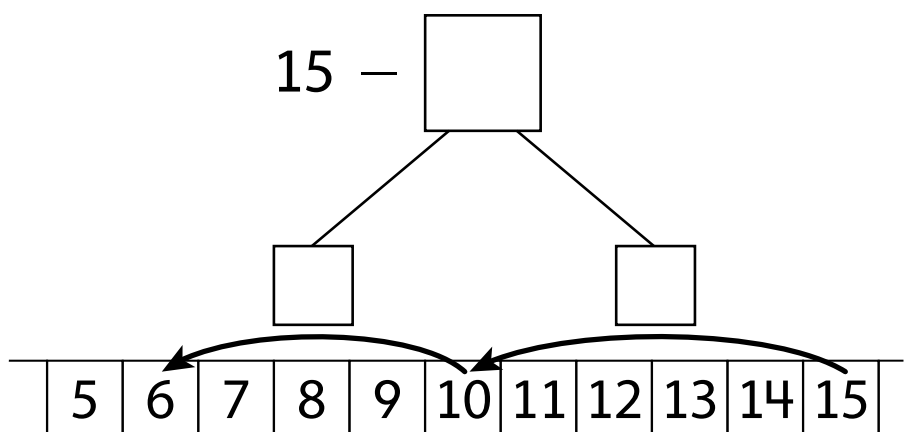


3 Find $15 - 9$.

$$15 - \underline{\quad} = 10$$

$$10 - 4 = \underline{\quad}$$

$$15 - 9 = \underline{\quad}$$

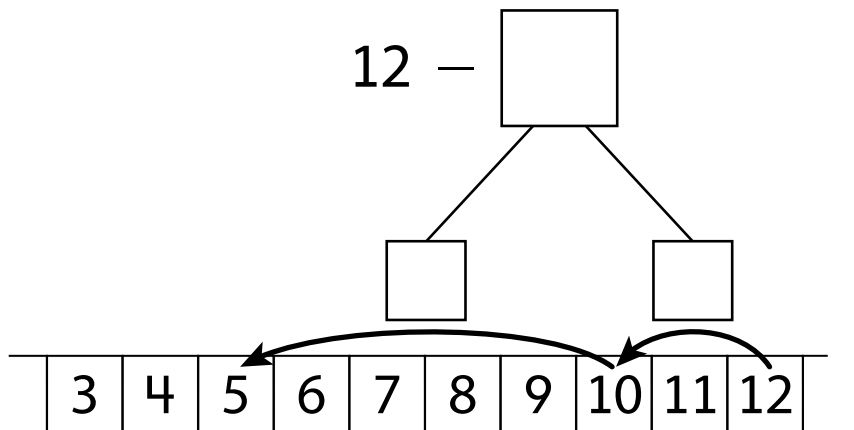


4 Find $12 - 7$.

$$12 - \underline{\quad} = 10$$

$$10 - 5 = \underline{\quad}$$

$$12 - 7 = \underline{\quad}$$

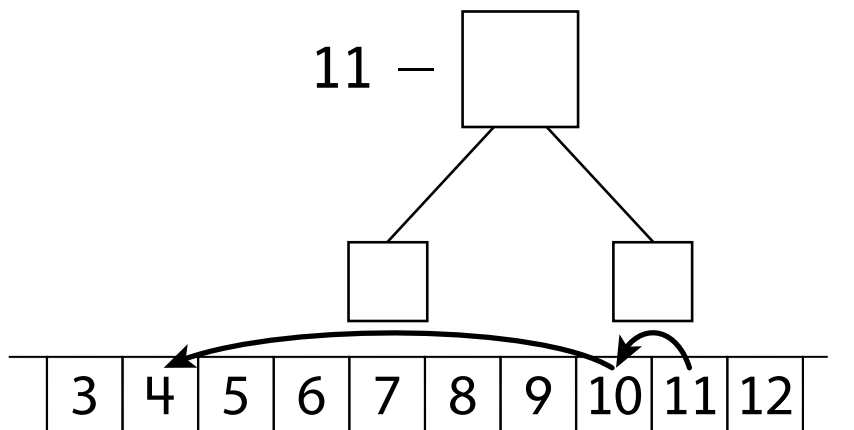


5 Find $11 - 7$.

$$11 - \underline{\quad} = 10$$

$$10 - 6 = \underline{\quad}$$

$$11 - 7 = \underline{\quad}$$

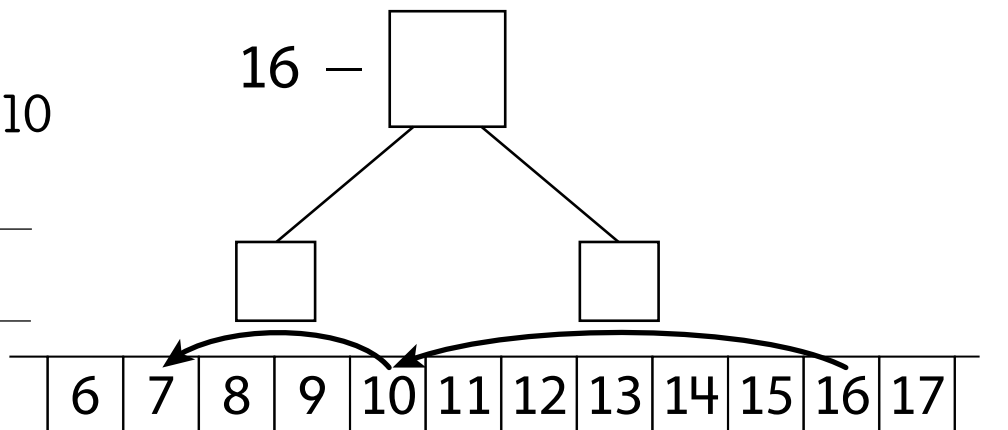


6 Find $16 - 9$.

$$16 - \underline{\quad} = 10$$


$$10 - 3 = \underline{\quad}$$

$$16 - 9 = \underline{\quad}$$

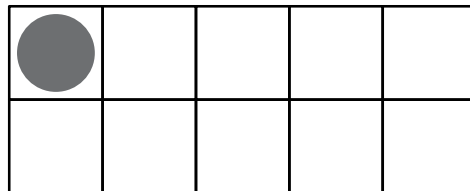


Draw counters to make 10. Then complete the equation.

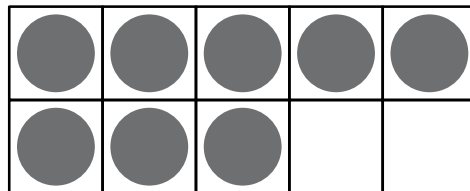
$10 = 9 + \underline{1}$



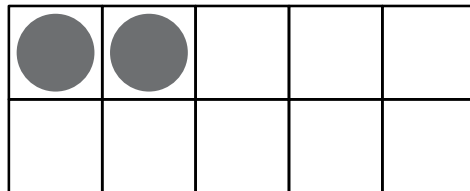
$10 = 1 + \underline{\quad}$



$10 = 8 + \underline{\quad}$

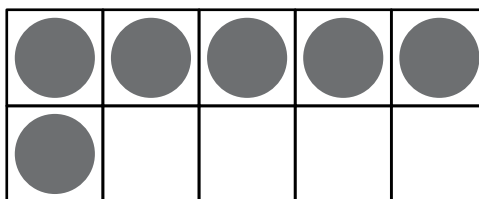


$10 = 2 + \underline{\quad}$

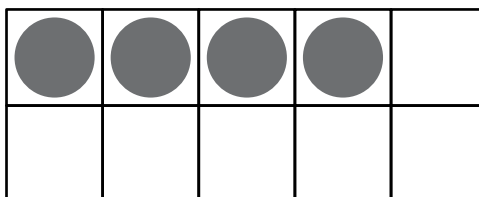


Name _____

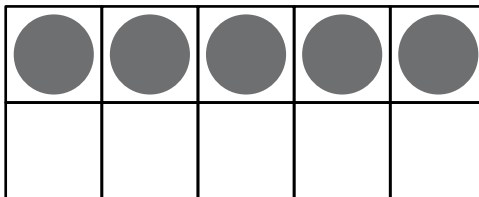
$10 = 6 + \underline{\quad}$



$10 = 4 + \underline{\quad}$



$10 = 5 + \underline{\quad}$



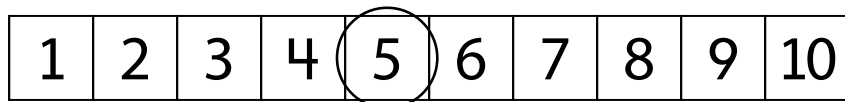
Solve each problem.

- 1** Marai sees 8 dogs at the park.

Some dogs go home.

Now Marai sees 5 dogs.

How many dogs go home?



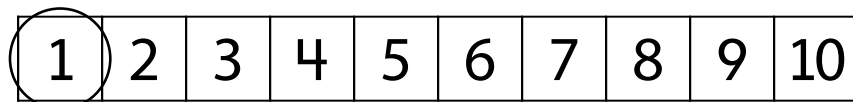
$$5 + \underline{\quad} = 8 \qquad 8 - \underline{\quad} = 5$$

 dogs go home.

- 2** Ben has 7 hats. 1 hat is red.

The rest are blue.

How many hats are blue?



$$7 = 1 + \underline{\quad} \qquad 7 - \underline{\quad} = 1$$

 hats are blue.

3 Asia has 7 books. She buys more books.

Now Asia has 9 books.

How many books does she buy?

1	2	3	4	5	6	7	8	9	10
---	---	---	---	---	---	---	---	---	----

$7 + \underline{\quad} = 9$

$9 - \underline{\quad} = 7$

Asia buys books.

4 Jake has 8 games. He gives some away.

Now he has 3 games.

How many games does Jake give away?

1	2	3	4	5	6	7	8	9	10
---	---	---	---	---	---	---	---	---	----

$3 + \underline{\quad} = 8$

$8 - \underline{\quad} = 3$

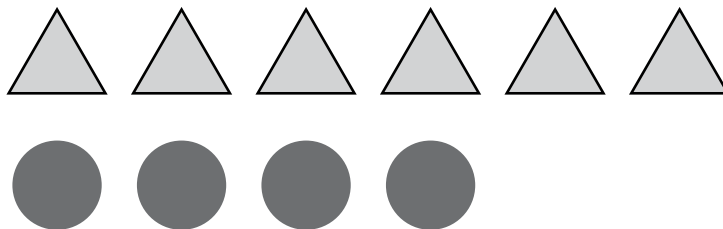
Jake gives games away.

Solve the subtraction problems.

- 1** There are 6 triangles. There are 4 circles.
How many more triangles are there?

$6 - 4 = \underline{\quad}$

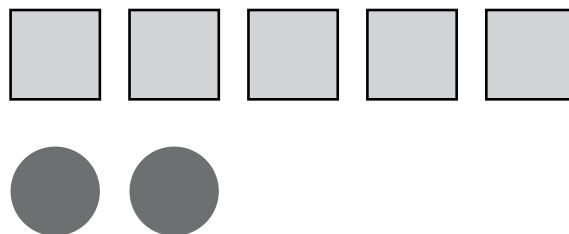
$\underline{\quad}$ more triangles



- 2** There are 5 squares. There are 2 circles.
How many more squares are there?

$5 - 2 = \underline{\quad}$

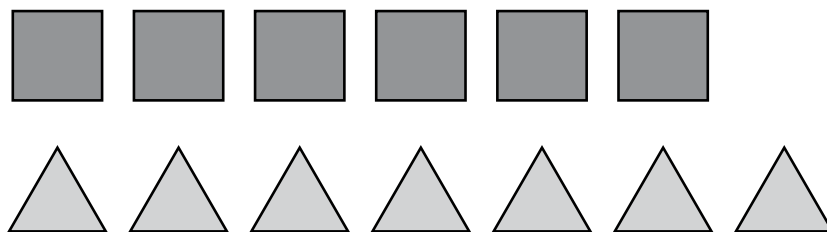
$\underline{\quad}$ more squares



- 3** There are 7 triangles. There are 6 squares.
How many more triangles are there?

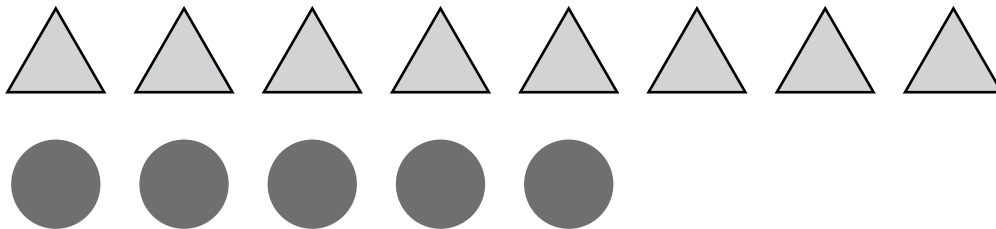
$7 - 6 = \underline{\quad}$

$\underline{\quad}$ more triangle



- 4** There are 8 triangles and 5 circles.

How many fewer circles than triangles are there?

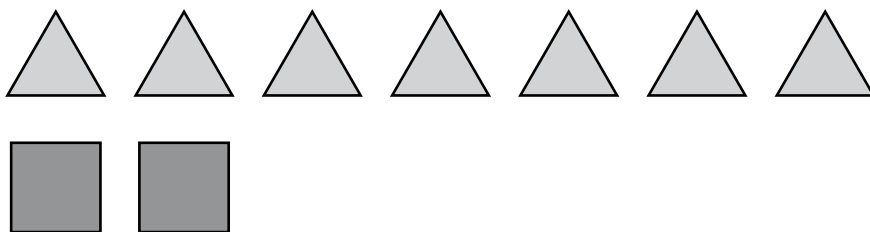


$$8 - 5 = \underline{\quad}$$

 fewer triangles

- 5** There are 2 squares and 7 triangles.

How many fewer squares than triangles are there?



$$7 - 2 = \underline{\quad}$$

 fewer squares

Choose a number from the box to complete the equation.

Example

0 1 2

$$2 + 0 = \underline{1} + 1$$

1 0 1 2

$$2 + 1 = 1 + \underline{\quad}$$

2 1 2 3

$$3 + 2 = \underline{\quad} + 3$$

3 1 2 3

$$3 + 2 = 4 + \underline{\quad}$$

4 0 1 2

$$6 + 0 = 5 + \underline{\quad}$$

5 4 5 6

$$3 + 3 = \underline{\quad} + 0$$

6 2 3 4

$$4 + 3 = 5 + \underline{\quad}$$

7 0 1 2

$$6 + 1 = 7 + \underline{\quad}$$

8 1 2 3

$$4 + 4 = 5 + \underline{\quad}$$

9 0 1 2

$$1 + 8 = 7 + \underline{\quad}$$

Draw lines to match the numbers.



11



17



15



18



13

Draw lines to match the numbers.

1 ten and 4 ones

12

1 ten and 9 ones

16

1 ten and 2 ones

14

1 ten and 6 ones

11

1 ten and 1 one

19

Discuss It

What is the same about each teen number? What is different?

Add.

1 $9 + 3 = \underline{12}$

2 $3 + 9 = \underline{\quad}$

3 $8 + 6 = \underline{\quad}$

4 $6 + 8 = \underline{\quad}$

5 $4 + 9 = \underline{\quad}$

6 $5 + 7 = \underline{\quad}$

7 $6 + 7 = \underline{\quad}$

8 $7 + 8 = \underline{\quad}$

9 $10 + 9 = \underline{\quad}$

10 $9 + 8 = \underline{\quad}$

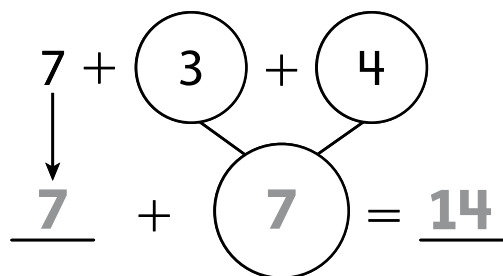
11 $6 + 3 + 4 = \underline{\quad}$

12 $5 + 9 + 1 = \underline{\quad}$

Discuss It

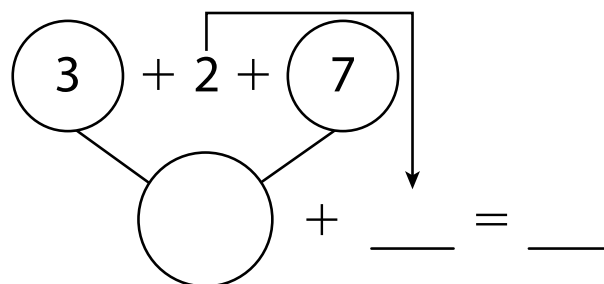
Explain how you solved Problem 11.

1 Find $7 + 3 + 4$.



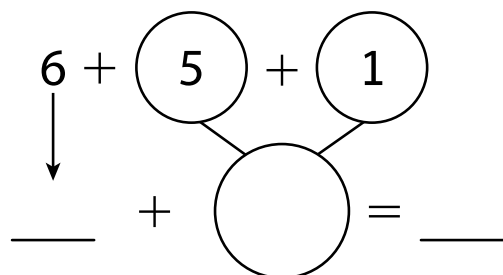
$7 + 3 + 4 = \underline{14}$

2 Find $3 + 2 + 7$.



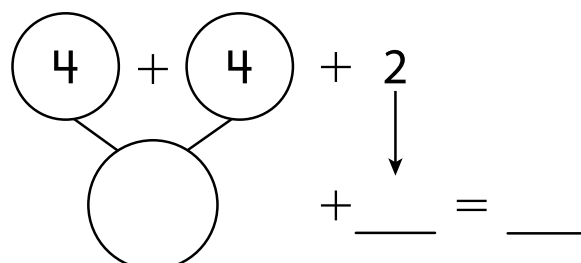
$3 + 2 + 7 = \underline{\quad}$

3 Find $6 + 5 + 1$.



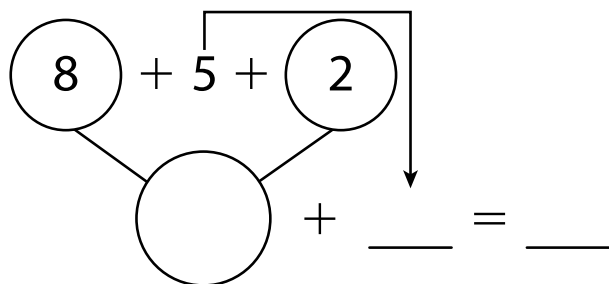
$6 + 5 + 1 = \underline{\quad}$

4 Find $4 + 4 + 2$.



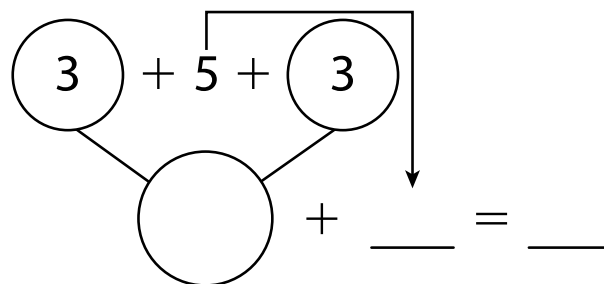
$4 + 4 + 2 = \underline{\quad}$

5 Find $8 + 5 + 2$.



$8 + 5 + 2 = \underline{\quad}$

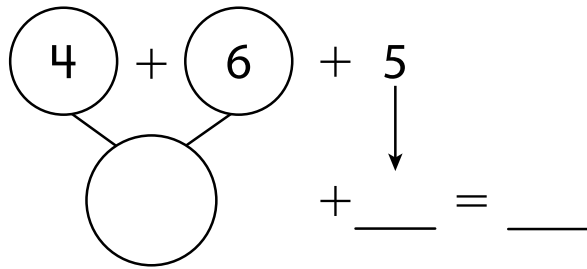
6 Find $3 + 5 + 3$.



$3 + 5 + 3 = \underline{\quad}$

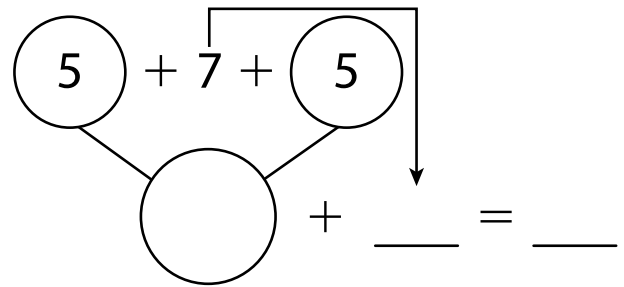
Name _____

7 Find $4 + 6 + 5$.



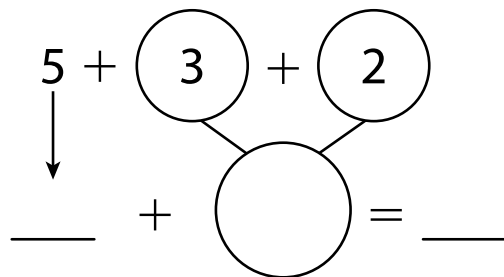
$$4 + 6 + 5 = \underline{\quad}$$

8 Find $5 + 7 + 5$.



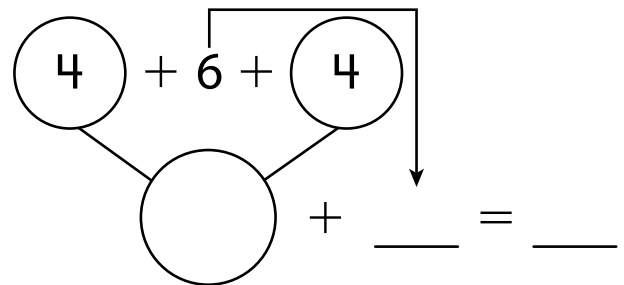
$$5 + 7 + 5 = \underline{\quad}$$

9 Find $5 + 3 + 2$.



$$5 + 3 + 2 = \underline{\quad}$$

10 Find $4 + 6 + 4$.

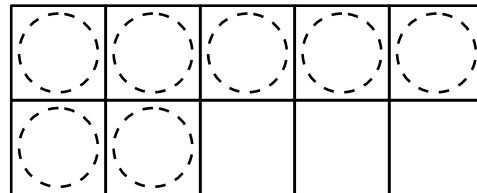



$$4 + 6 + 4 = \underline{\quad}$$

11 When solving $4 + 6 + 4$, Ava adds $4 + 6$ first. Rico adds $4 + 4$ first. Who is correct? Why?

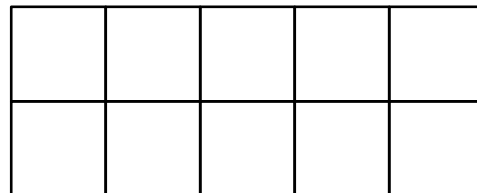
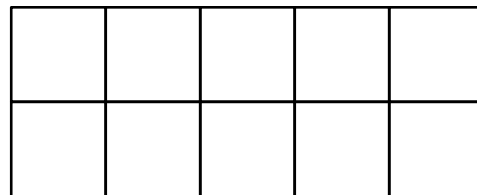
1 Find the missing number.

$$17 - \underline{\quad} = 9$$



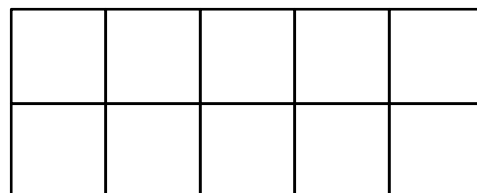
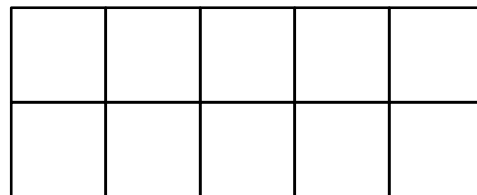
2 Find the missing number.

$$\underline{\quad} - 8 = 5$$



3 Find the missing number.

$$15 - \underline{\quad} = 6$$



Name _____

- 4** Find the missing number.

$$7 = \underline{\quad} - 7$$

- 5** Find the missing number.

$$8 = 12 - \underline{\quad}$$

- 6** Find the missing number.

$$\underline{\quad} - 9 = 9$$

- 7** Find the missing number.

$$16 - \underline{\quad} = 7$$

- 8** Find the missing number.

$$15 - \underline{\quad} = 8$$

- 9** Find the missing number.

$$5 = \underline{\quad} - 9$$

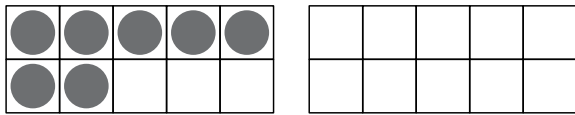
- 10** Find the missing number.

$$\underline{\quad} - 7 = 10$$

Discuss It

- 11** How did you use the 10-frames to find the missing number in Problem 4?

- 1** Amy has some crayons.
She finds 7 more crayons.
Now she has 18 crayons.
How many crayons did she have at the start?



$$\underline{11} + 7 = 18$$

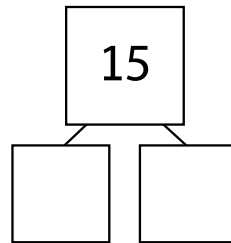
_____ crayons

- 3** Marco has 16 flowers.
He gives some to Alex.
Now Marco has 8 flowers.
How many did he give to Alex?

$$16 - \underline{\quad} = \underline{\quad}$$

_____ flowers

- 2** There are 15 fish in a tank.
7 of the fish are orange.
The rest are white.
How many are white?



$$15 - \underline{\quad} = \underline{\quad}$$

_____ white fish

- 4** There are 12 bagels in a box.
Some bagels are eaten.
Now there are 4 bagels.
How many bagels were eaten?

$$12 - \underline{\quad} = \underline{\quad}$$

_____ bagels

Name _____

- 5** Mica eats 4 fewer pretzels than Wyatt.
Wyatt eats 14 pretzels.
How many pretzels did Mica eat?

$$\underline{\quad} - \underline{\quad} = \underline{\quad}$$

_____ pretzels

- 6** Pete reads for 9 minutes.
The next day he reads for 6 minutes.
How many minutes did he read altogether?

$$\underline{\quad} + \underline{\quad} = \underline{\quad}$$

_____ minutes